
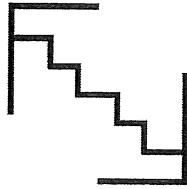



For the next problems...tell whether the design has rotation symmetry. If it does list the angle of rotation. Also, list any additional angles of rotation?



angle of rotation?
other angles?



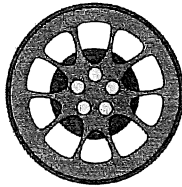
angle of rotation?
other angles?



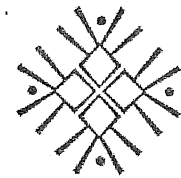
angle of rotation?
other angles?



angle of rotation?
other angles?



angle of rotation?
other angles?



angle of rotation?
other angles?

In the class lesson you investigated 'hubcap designs' because they had rotational symmetry. In the circles below...sketch two different hubcap designs of your own?

